


ADDITION EXERCISES

Name : Class :

Match the figures with the correct answers; use a ruler to draw an arrow pointing to the corresponding answer

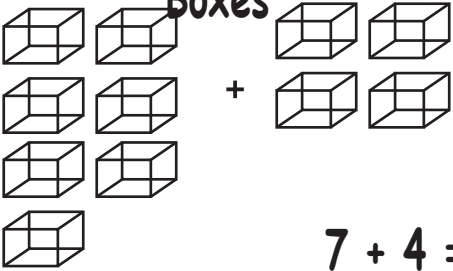
Questions

Fish

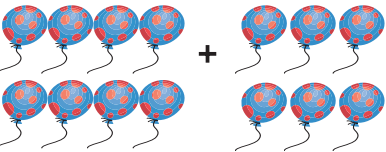


$2 + 3 =$

Boxes



$7 + 4 =$



Balloons

$8 + 6 =$

Stars



$6 + 4 =$

10

14

5

11